



Maha Bodhi School  
2013 Topical Review 4

Mathematics

Name : \_\_\_\_\_ (      )

Class: Pr 1 \_\_\_\_\_

Duration : 50 min

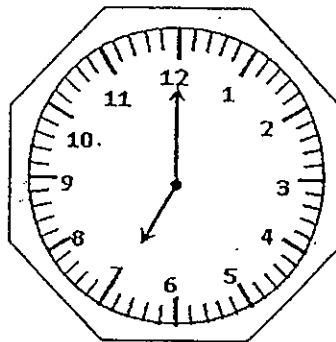
Date : 25 October 2013    Parent's Signature : \_\_\_\_\_

---

**Section A (30 marks)**


Questions 1 to 15 carry 2 marks each.

1.    What is the time on the clock?



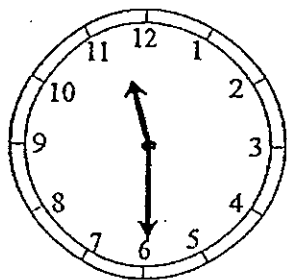
It is

2.

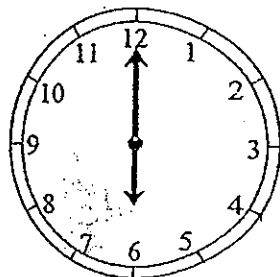


The cakes are grouped into  groups of

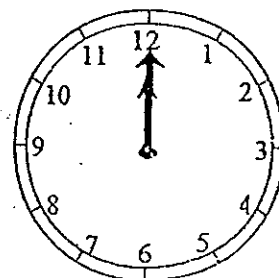
3. Which one of the following clocks shows half past 12?  
Write the correct letter in the box.



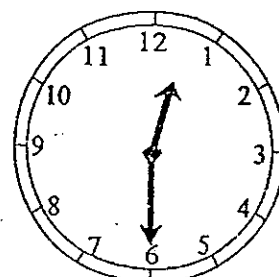
A



B



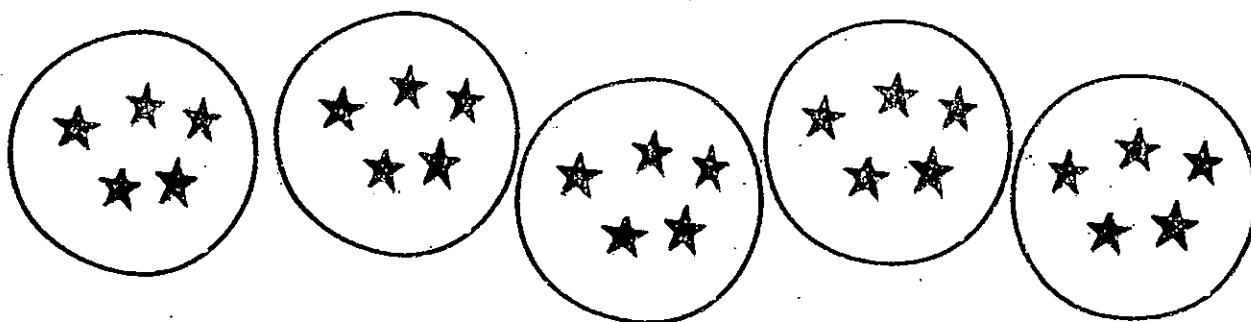
C



D


Clock  shows half past 12.

4. How many stars are there in all?

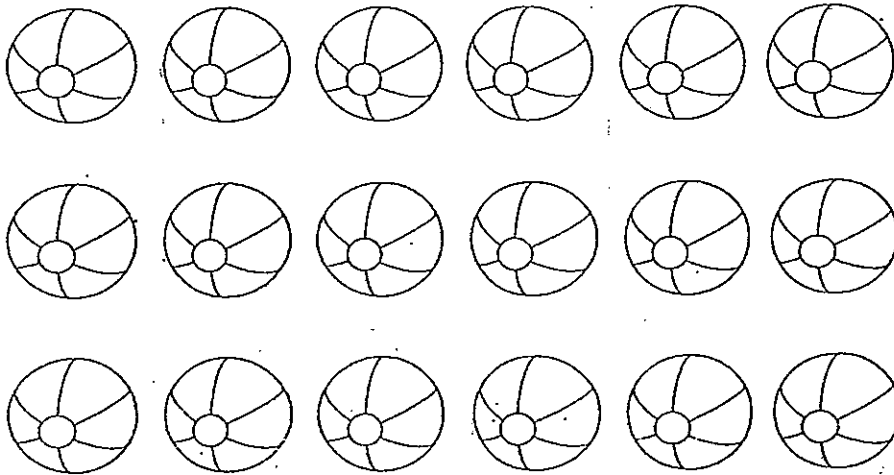


There are  stars in all.

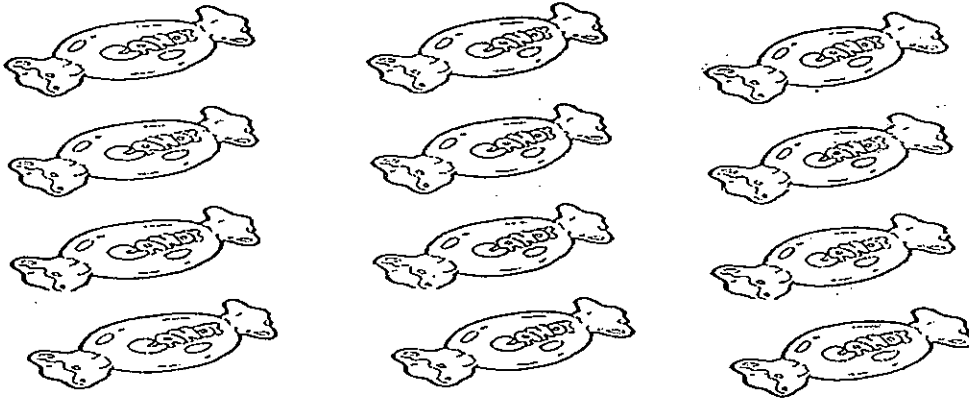
5. Colour the correct number of coins to make fifty cents.



6. Circle 6 equal groups of balls.

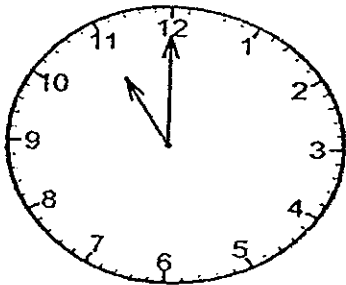


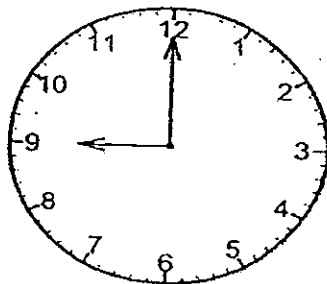
7. Angie puts the sweets shown below into bags.  
 She puts 2 sweets into each bag.  
 How many bags will she need?

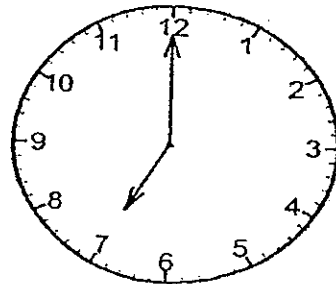


She will need  bags.

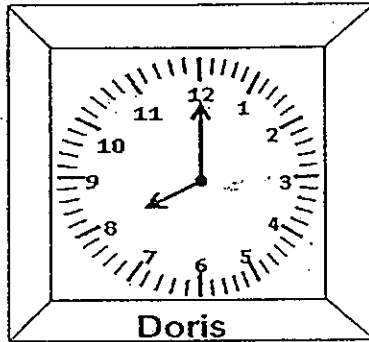
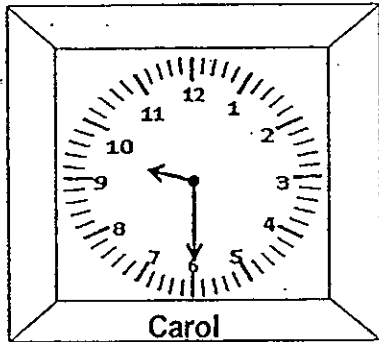
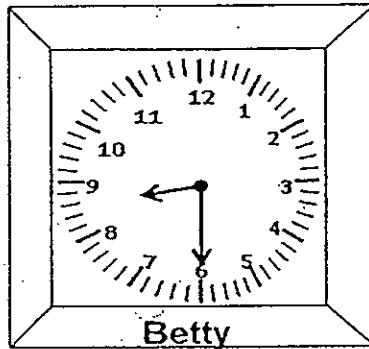
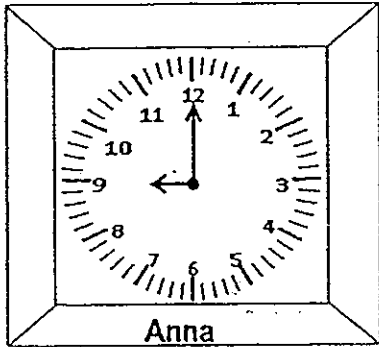
8. Bob read a book for 2 hours before going to bed.  
 He went to bed at 9 o'clock.  
 What time did Bob start reading?  
 Tick the clock that shows the correct time.







9. Four girls go to bed at different times at night.  
Who goes to bed last?



goes to bed last.

10. Jacob saves \$3 a day.  
How much can Jacob save in 3 days?

Jacob can save \$\_\_\_\_\_ in 3 days.

11. Mr Lim has the following amount of money shown below.  
He wants to buy a bag which costs \$32.  
How much more money will he need?

The diagram shows three rectangular boxes representing bills, stacked vertically. The top box contains '\$10', the middle box contains '\$5', and the bottom box contains '\$2'. To the right of these boxes are several circular coins. There is one 50c coin, one 10c coin, two 20c coins, and four \$1 coins arranged in a grid-like pattern.

He will need \$\_\_\_\_\_ more.

12. A bell chimes once at 1 o'clock, twice at 2 o'clock, thrice at 3 o'clock and so on.  
How many times has it chimed altogether from 1 o'clock to 6 o'clock?

The bell has chimed for  times.

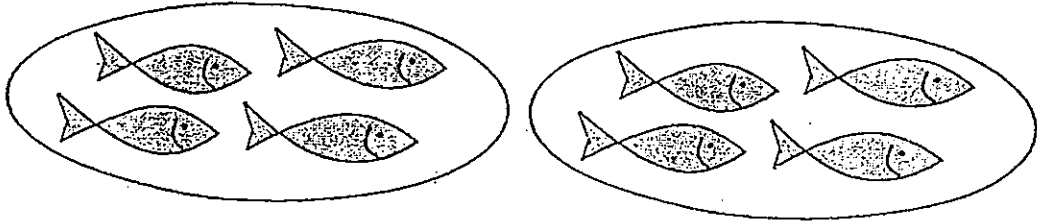
13. Mdm Tan has less than 20 erasers.  
If she packs them in groups of 4, she has 2 erasers left.  
What is the most number of erasers she can have?

The most number of erasers she can have is .



14. Sofia has 2 plates.

She puts 4 fish on each plate.

Write a multiplication number equation to show how many fish Sofia has altogether.




$$\square \times \square = \square$$

15. Tim has 12  and 6 .

He needs to pack an equal number of each shape in each box.

Draw the correct number of shapes in the 3 boxes.





**Section B (20 marks)**

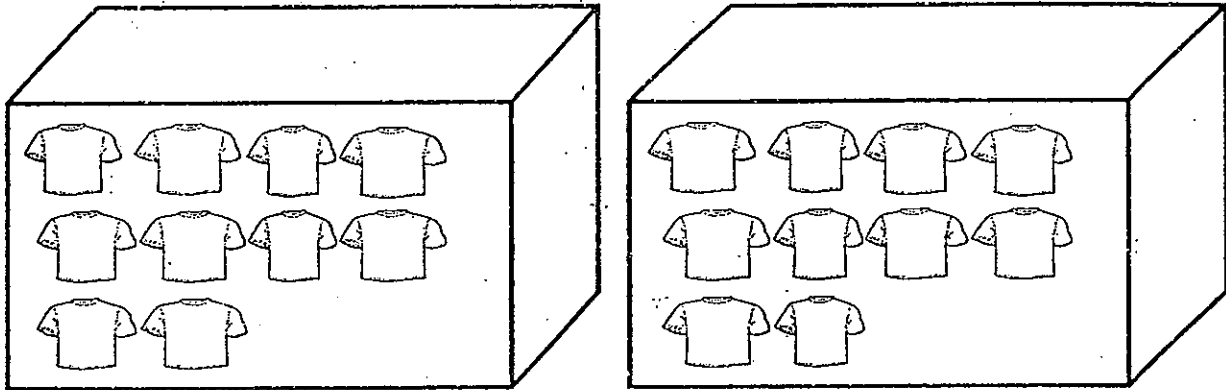
Questions 16 to 20 carry 4 marks each.

Fill in the blanks and the statements carefully.

16. Mr Ho buys 2 boxes of T-shirts.

There are 10 T-shirts in each box.

How many T-shirts does he have altogether?




He has \_\_\_\_\_ T-shirts altogether.

17. Rita has 12 stickers.

She decides to share the stickers with her three friends equally.

How many stickers does each of them get?

Circle to show your answer.




Each of them gets \_\_\_\_\_ stickers.

18. At Shop A, a pair of shoes costs \$29.


At Shop B, the same pair of shoes costs \$45.

How much more does the pair of shoes cost at Shop B than at Shop A?



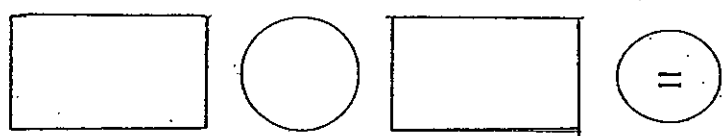
It costs \$ \_\_\_\_\_ more at Shop B.

19. A group of hunters caught some deer in a jungle.  
 If the deer caught have a total of 20 legs, how many deer did  
 hunters catch?  
 Circle to show your answer.




The hunters caught \_\_\_\_\_ deer.

20. 2 pens and 2 pencils cost \$12.  
 Jane buys 2 pens and 1 pencil.  
 She gives the cashier \$10.  
 How much does 1 pencil cost?



The pencil costs \$\_\_\_\_\_.

----- The End -----



*Remember to check your work!*



# Answer Ke

## EXAM PAPER 2013

SCHOOL : MAHA BODHI SCHOOL

SUBJECT : PRIMARY 1 MATHEMATICS

TERM : SA2 (Topical Review 4)

### Section A

Q1) 7 o'clock

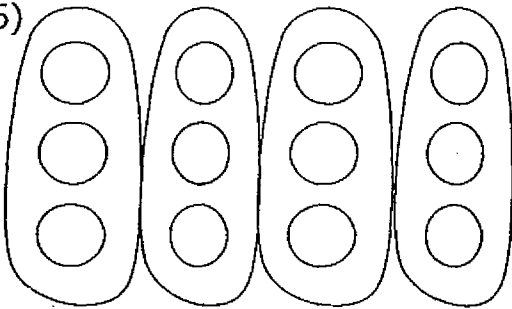
Q2) 4

Q3) D

Q4) 25

Q5) 1 x 20¢, 2 x 10¢, 2 x 5¢

Q6)



Q7) 6

Q8) 7 o'clock

Q9) Carol

Q10) 9

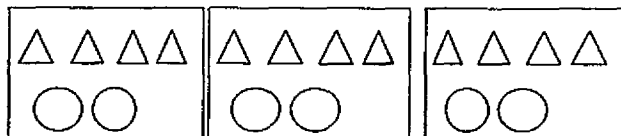
Q11) \$10

Q12) 21

Q13) 18

Q14)  $2 \times 4 = 8$


Q15)



Section B

Q16)  $2 \times 10 = 20$  t-shirts

Q17)



Each of them gets 3 stickers.

Q18)  $\$45 - \$29 = \$16$

Q19) 5 deer

Q20)  $\$12 - \$10 = \$2$